

Name: _____


1. Sophia had 4 boxes of
crayons. There were 8
crayons in each box.
How many crayons did
Sophia have in all?

Explain your thoughts:

Illustrate your thinking:

Write a number sentence:

My Answer:



Name: _____

2. Martin got paid \$237
in March. In April he
got paid \$419. How
much did Martin's pay
increase?

Illustrate your thinking:

Write a number sentence:

My Answer:


Explain your thoughts:

Name: _____


3. Jace had 36 rocks. He wanted to split them evenly into 4 buckets. How many rocks should he put into each bucket?

Explain your thoughts:


Illustrate your thinking:



Write a number sentence:



My Answer:



Name: _____

4. Emily went to the farm. She saw 20 legs under the fence. How many cows did Emily see ?

Illustrate your thinking:

Write a number sentence:

My Answer:

Explain your thoughts:

Name: _____

5. Tyler and Christopher made \$14 together for raking leaves. How much money did they each make if they split it evenly?

Illustrate your thinking:

Write a number sentence:

My Answer:

Explain your thoughts:

Name: _____

6. Chip made \$20 a day. How much money would Chip make in 3 days?

Illustrate your thinking:

Write a number sentence:

My Answer:

Explain your thoughts:

Name: _____

7. Harley washed 7
cars for her dad's
car wash. How many
tires did Harley
wash?

Illustrate your thinking:

Write a number sentence:

My Answer:

Explain your thoughts:

Name: _____

8. Tabitha walked her
dog each day for 2
miles. How many
miles did Tabitha walk
in one week?

Illustrate your thinking:

Write a number sentence:

My Answer:

Explain your thoughts:

Name: _____

q. Bryan made 4 rows of
rose bushes. He placed 3
bushes in each row. How
many bushes does he
have altogether?

Illustrate your thinking:

Write a number sentence:

My Answer:

Explain your thoughts:

Name: _____

10. Bekah had 4 dogs.
They each ate 6
treats. How many
treats did they eat in
all?

Illustrate your thinking:

Write a number sentence:

My Answer:

Explain your thoughts:

Name: _____


11. Marcus collected 873
baseball cards. He sold
295 of them. How many
baseball cards does
Marcus have now?

Illustrate your thinking:

Write a number sentence:

Explain your thoughts:

My Answer:



Name: _____

12. Velma read each night with her three sisters. If she read with each of them for 9 minutes, how many minutes did she spend reading to them?

Illustrate your thinking:

Write a number sentence:

My Answer:

Explain your thoughts:

Name: _____

13. Carlos rode his bike for 3 miles each day. How many miles did Carlos ride on Monday, Tuesday, and Wednesday combined?

Illustrate your thinking:

Write a number sentence:

My Answer:

Explain your thoughts:

Name: _____

14. Tucker weighed 38 pounds when he was three months old. When he was a year old, he weighed 84 pounds. How much did Tucker's weight increase?

Illustrate your thinking:

Write a number sentence:

My Answer:


Explain your thoughts:

Name: _____


15. Annie made bracelets for her two best friends. If she used 9 beads on each bracelet, how many beads did Annie use in all?

Explain your thoughts:


Illustrate your thinking:



Write a number sentence:



My Answer:



Name: _____

16. There were 9
boxes of cookies. Each
box had 9 cookies.
How many cookies
were there in all?

Illustrate your thinking:

Write a number sentence:

My Answer:

Explain your thoughts:

Name: _____

17. Rico bought 8
t-shirts for his cousins.
If each t-shirt cost \$7
how much money did
Rico spend on t-shirts?

Illustrate your thinking:

Write a number sentence:

My Answer:

Explain your thoughts:

Name: _____

18. An orange weighs 381 grams. An apple weighs 247 grams. How many more grams does an orange weigh?

Illustrate your thinking:

Write a number sentence:

My Answer:


Explain your thoughts:

Name: _____


19. Tucker ate 3 pounds
of dog food each day.
How many pounds of
food will he eat in nine
days?

Explain your thoughts:


Illustrate your thinking:



Write a number sentence:



My Answer:



Name: _____

20. Kyra spent eight minutes each night reading her book. How many minutes did Kyra read for six nights.

Illustrate your thinking:

Write a number sentence:

My Answer:

Explain your thoughts:

Name: _____

21. Bekah bought 8 cases
of water. In each case
there were 10 waters.
How many waters did
Bekah buy in all?

Illustrate your thinking:

Write a number sentence:

My Answer:

Explain your thoughts:

Name: _____

22. Faye's dog pen was 8 feet long and 5 feet wide. What is the area of Faye's dog pen?

Illustrate your thinking:

Write a number sentence:

My Answer:

Explain your thoughts:

Name: _____

23. Sarah weighed 153 pounds in August. She weighed only 127 pounds in December. How much weight did Sarah lose?

Illustrate your thinking:

Write a number sentence:

My Answer:

Explain your thoughts:

Name: _____

24. Rachel had 56 different beads. She wanted to make her eight friends necklaces. How many beads should she put on each necklace to split them evenly?

Illustrate your thinking:

Write a number sentence:

Explain your thoughts:

My Answer:

